

Name: ..... Boy/Girl

School: .....

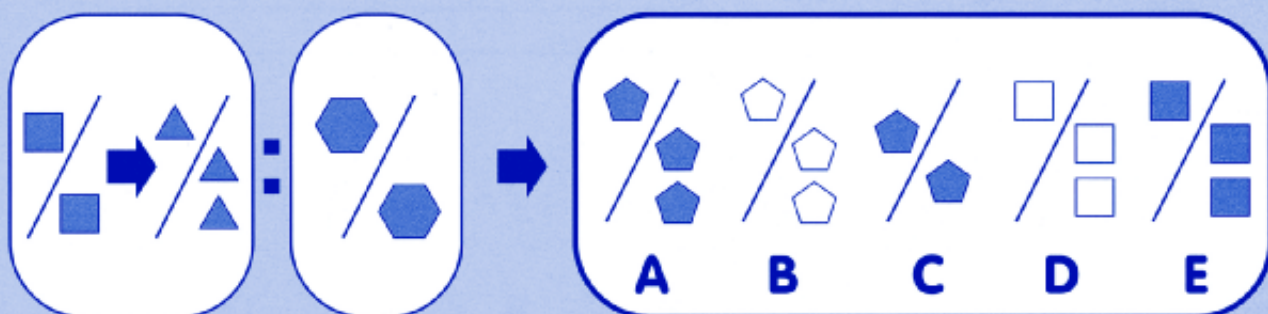
Class: ..... Date of birth: ..... Date of test: .....

AGE:	COMPLETED	RAW SCORE	STANDARDISED
YEARS.....	MONTHS.....	TOTAL.....	SCORE.....

## Find a partner

Look at the two shapes in the first box. Decide how they are related (go together). Now look at the shape in a box by itself. Which of the five shapes on the right goes with the shape on its own to make a pair in the same way as the first two shapes? Draw a line under your answer.

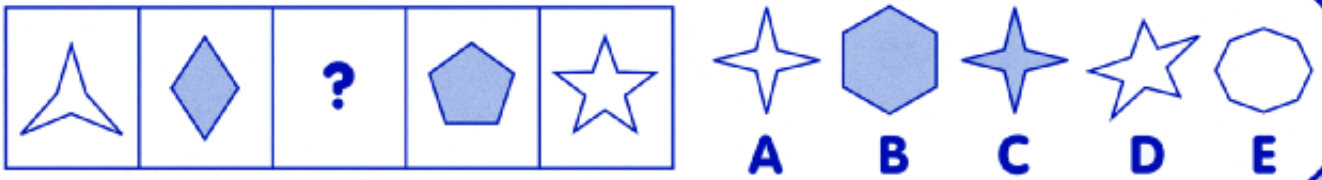
## Practice




# Fill the space

Which shape fits into the space? Draw a line under your answer.

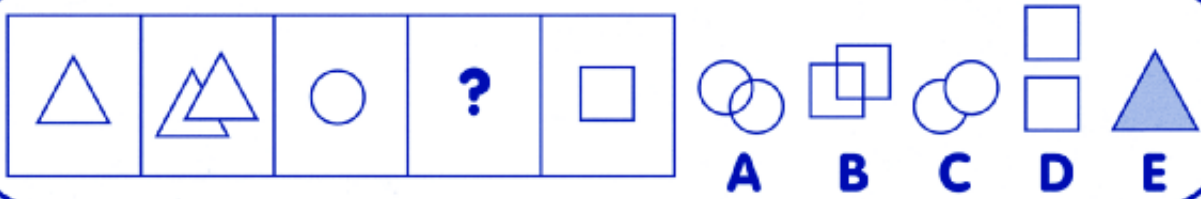
## Practice



13



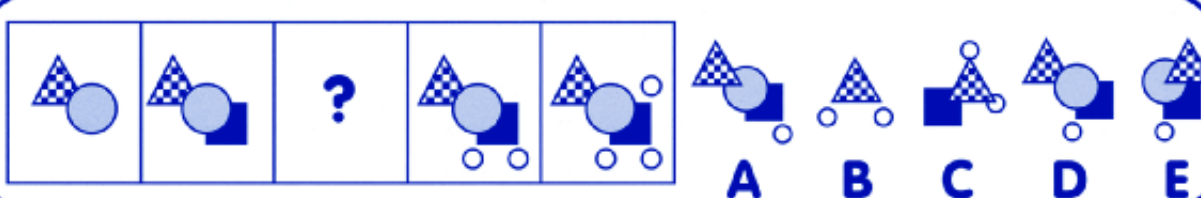
14



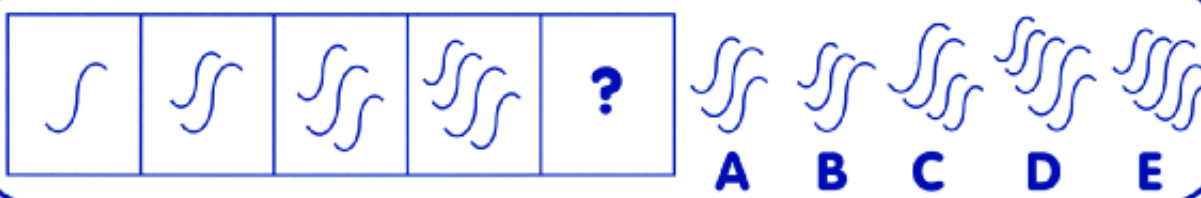
15



16



17



## What comes next?

The numbers on the left-hand side follow a rule. Work out the rule. Which number comes next? Draw a line under your answer.

## Practice

32   16   8   4   ?                      6   0   2   1

25   10   30   50   70   ?                      100   90   80   95

26    $\frac{1}{4}$     $\frac{1}{2}$     $\frac{3}{4}$    1   ?                       $1\frac{1}{4}$     $1\frac{1}{2}$    2   0

27   18   20   24   30   ?                      38   34   40   36

28   1000   200   20   4   ?                      1   0.4   0.45   0

29   1   4   10   22   ?                      46   40   30   34

30   5   15   35   65   ?                      95   105   115   100

31   90   72   56   42   ?                      50   36   24   30

32   143   117   91   65   ?                      60   43   35   39

33   2   3   5   9   ?                      10   18   17   20

34   8   24   96   480   ?                      2880   2100   3000   1015